

NCERT Solutions for Class 7 Maths Chapter 2

Fractions and Decimals Class 7

Chapter 2 Fractions and Decimals Exercise 2.1, 2.2, 2.3, 2.4, 2.5, 2.6, 2.7 Solutions

Exercise 2.1 : Solutions of Questions on Page Number : 31

Q1 :

Solve:

(i) $2 - \frac{3}{5}$ (ii) $4 + \frac{7}{8}$ (iii) $\frac{3}{5} + \frac{2}{7}$

(iv) $\frac{9}{11} - \frac{4}{15}$ (v) $\frac{7}{10} + \frac{2}{5} + \frac{3}{2}$ (vi) $2\frac{2}{3} + 3\frac{1}{2}$

(vii) $8\frac{1}{2} - 3\frac{5}{8}$

Answer :

(i) $2 - \frac{3}{5} = \frac{2 \times 5}{5} - \frac{3}{5} = \frac{10 - 3}{5} = \frac{7}{5}$

(ii) $4 + \frac{7}{8} = \frac{4 \times 8}{8} + \frac{7}{8} = \frac{(4 \times 8) + 7}{8} = \frac{39}{8} = 4\frac{7}{8}$

(iii) $\frac{3}{5} + \frac{2}{7} = \frac{3 \times 7}{5 \times 7} + \frac{2 \times 5}{7 \times 5} = \frac{21 + 10}{35} = \frac{31}{35}$

(iv) $\frac{9}{11} - \frac{4}{15} = \frac{9 \times 15}{11 \times 15} - \frac{4 \times 11}{15 \times 11} = \frac{135 - 44}{165} = \frac{91}{165}$

(v) $\frac{7}{10} + \frac{2}{5} + \frac{3}{2} = \frac{7}{10} + \frac{2 \times 2}{5 \times 2} + \frac{3 \times 5}{2 \times 5} = \frac{7 + 4 + 15}{10} = \frac{26}{10} = \frac{13}{5} = 2\frac{3}{5}$

(vi) $2\frac{2}{3} + 3\frac{1}{2} = \frac{8}{3} + \frac{7}{2} = \frac{8 \times 2}{3 \times 2} + \frac{7 \times 3}{2 \times 3} = \frac{16 + 21}{6} = \frac{37}{6} = 6\frac{1}{6}$

(vii) $8\frac{1}{2} - 3\frac{5}{8} = \frac{17}{2} - \frac{29}{8} = \frac{17 \times 4}{2 \times 4} - \frac{29}{8} = \frac{68 - 29}{8} = \frac{39}{8} = 4\frac{7}{8}$

Q2 :

Arrange the following in descending order:

(i) $\frac{2}{9}, \frac{2}{3}, \frac{8}{21}$ (ii) $\frac{1}{5}, \frac{3}{7}, \frac{7}{10}$

Answer :

(i) $\frac{2}{9}, \frac{2}{3}, \frac{8}{21}$

Changing them to like fractions, we obtain

$$\begin{aligned}\frac{2}{9} &= \frac{2 \times 7}{9 \times 7} = \frac{14}{63} \\ \frac{2}{3} &= \frac{2 \times 21}{3 \times 21} = \frac{42}{63} \\ \frac{8}{21} &= \frac{8 \times 3}{21 \times 3} = \frac{24}{63}\end{aligned}$$

Since $42 > 24 > 14$,

$$\therefore \frac{2}{3} > \frac{8}{21} > \frac{2}{9}$$

(ii) $\frac{1}{5}, \frac{3}{7}, \frac{7}{10}$

Changing them to like fractions, we obtain

$$\begin{aligned}\frac{1}{5} &= \frac{1 \times 14}{5 \times 14} = \frac{14}{70} \\ \frac{3}{7} &= \frac{3 \times 10}{7 \times 10} = \frac{30}{70} \\ \frac{7}{10} &= \frac{7 \times 7}{10 \times 7} = \frac{49}{70}\end{aligned}$$

As $49 > 30 > 14$,

$$\therefore \frac{7}{10} > \frac{3}{7} > \frac{1}{5}$$

Q3 :

In a "magic square", the sum of the numbers in each row, in each column and along the diagonal is the same. Is this a magic square?

$\frac{4}{11}$	$\frac{9}{11}$	$\frac{2}{11}$	(Along the first row $\frac{4}{11} + \frac{9}{11} + \frac{2}{11} = \frac{15}{11}$)
----------------	----------------	----------------	---

$\frac{3}{11}$	$\frac{5}{11}$	$\frac{7}{11}$	
$\frac{8}{11}$	$\frac{1}{11}$	$\frac{6}{11}$	

Answer :

$$\frac{4}{11} + \frac{9}{11} + \frac{2}{11} = \frac{15}{11}$$

Along the first row, sum =

$$\frac{3}{11} + \frac{5}{11} + \frac{7}{11} = \frac{15}{11}$$

Along the second row,

$$\frac{8}{11} + \frac{1}{11} + \frac{6}{11} = \frac{15}{11}$$

sum =

Along the third row,

$$\frac{4}{11} + \frac{3}{11} + \frac{8}{11} = \frac{15}{11}$$

sum =

Along the first column,

$$\frac{9}{11} + \frac{5}{11} + \frac{1}{11} = \frac{15}{11}$$

sum =

Along the second

$$\frac{2}{11} + \frac{7}{11} + \frac{6}{11} = \frac{15}{11}$$

column, sum =

Along the third column,

$$\frac{4}{11} + \frac{5}{11} + \frac{6}{11} = \frac{15}{11}$$

sum =

Along the first diagonal,

$$\frac{2}{11} + \frac{5}{11} + \frac{8}{11} = \frac{15}{11}$$

sum =

Along the second diagonal, sum =

Since the sum of the numbers in each row, in each column, and along the diagonals is the same, it is a magic square.

Q4 :

$$12\frac{1}{2} \text{ cm long and } 10\frac{2}{3} \text{ cm wide.}$$

A rectangular sheet of paper is

Find its perimeter.

Answer :

$$\text{Length} = 12\frac{1}{2} \text{ cm} = \frac{25}{2} \text{ cm}$$

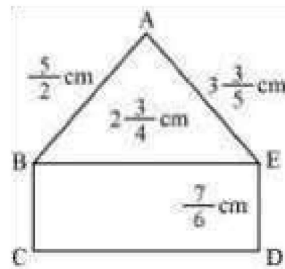
$$\text{Breadth} = 10\frac{2}{3} \text{ cm} = \frac{32}{3} \text{ cm}$$

$$\text{Perimeter} = 2 \times (\text{Length} + \text{Breadth})$$

$$\begin{aligned} &= 2 \times \left[\frac{25}{2} + \frac{32}{3} \right] = 2 \times \left[\frac{(25 \times 3) + (32 \times 2)}{6} \right] = 2 \times \left[\frac{75 + 64}{6} \right] \\ &= 2 \times \frac{139}{6} = \frac{139}{3} = 46\frac{1}{3} \text{ cm} \end{aligned}$$

Q5 :

Find the perimeters of (i) $\triangle ABE$ (ii) the rectangle BCDE in this figure. Whose perimeter is greater?



Answer :

(i) Perimeter of $\triangle ABE = AB + BE + EA$

$$\begin{aligned}
 &= \left(\frac{5}{2} + 2\frac{3}{4} + 3\frac{3}{5} \right) = \left(\frac{5}{2} + \frac{11}{4} + \frac{18}{5} \right) \\
 &= \left(\frac{5 \times 10}{2 \times 10} + \frac{11 \times 5}{4 \times 5} + \frac{18 \times 4}{5 \times 4} \right) \\
 &= \frac{50 + 55 + 72}{20} = \frac{177}{20} = 8\frac{17}{20} \text{ cm}
 \end{aligned}$$

(ii)

$$\therefore \frac{177}{20} > \frac{43}{6}$$

Perimeter ($\triangle ABE$) > Perimeter (BCDE)

Q6 :

Salil wants to put a picture in a frame. The $7\frac{3}{5}$ picture is cm wide.

To fit in the frame the picture cannot be more $7\frac{3}{10}$ than cm wide. How much should the picture be trimmed?

As $531 > 430$,

Perimeter of rectangle = 2 (Length + Breadth)

$$\begin{aligned}
 \text{Perimeter of rectangle} &= 2 \left[\frac{11}{4} + \frac{7}{6} \right] \\
 &= 2 \left[\frac{11 \times 3}{4 \times 3} + \frac{7 \times 2}{6 \times 2} \right] = 2 \left[\frac{33 + 14}{12} \right] \\
 &= 2 \times \frac{47}{12} = \frac{47}{6} = 7\frac{5}{6} \text{ cm}
 \end{aligned}$$

$$\frac{177}{20} \text{ cm}$$

Perimeter of $\triangle ABE$ =

Changing them to like fractions, we obtain

$$\begin{aligned}
 \frac{177}{20} &= \frac{177 \times 3}{20 \times 3} = \frac{531}{60} \\
 \frac{43}{6} &= \frac{43 \times 10}{6 \times 10} = \frac{430}{60}
 \end{aligned}$$

Answer :

$$\text{Width of picture} = 7\frac{3}{5} = \frac{38}{5} \text{ cm}$$

$$\text{Required width} = 7\frac{3}{10} = \frac{73}{10} \text{ cm}$$

$$\begin{aligned} \text{The picture should be trimmed by} &= \left(\frac{38}{5} - \frac{73}{10} \right) \\ &= \left(\frac{38 \times 2}{5 \times 2} - \frac{73}{10} \right) = \frac{76 - 73}{10} = \frac{3}{10} \text{ cm} \end{aligned}$$

Q7 :

Ritu ate $\frac{3}{5}$ part of an apple and the remaining apple was eaten by her brother Somu. How much part of the apple did Somu eat? Who had the larger share? By how much?

Answer :

$$\text{Part of apple eaten by Ritu} = \frac{3}{5}$$

Part of apple eaten by Somu = 1 - Part of apple eaten by Ritu

$$= 1 - \frac{3}{5} = \frac{2}{5}$$

Therefore, Somu ate $\frac{2}{5}$ part of the apple.

Since $3 > 2$, Ritu had the larger share.

$$\text{Difference between the 2 shares} = \frac{3}{5} - \frac{2}{5} = \frac{1}{5}$$

Therefore, Ritu's share is larger than the share of Somu by $\frac{1}{5}$.

Q8 :

Michael finished colouring a picture in $\frac{7}{12}$ hour. Vaibhav finished colouring the same picture in $\frac{3}{4}$ hour. Who worked longer? By what fraction was it longer?

Answer :

$$\text{Time taken by Michael} = \frac{7}{12} \text{ hr}$$

$$\text{Time taken by Vaibhav} = \frac{3}{4} \text{ hr}$$

Converting these fractions into like fractions, we obtain

$$\frac{3}{4} = \frac{3 \times 3}{4 \times 3} = \frac{9}{12}$$

And, $\frac{7}{12}$

Since $9 > 7$,

Vaibhav worked longer.

$$\text{Difference} = \frac{9}{12} - \frac{7}{12} = \frac{2}{12} = \frac{1}{6} \text{ hour}$$

Exercise 2.2 : Solutions of Questions on Page Number : 36

Q1 :

Which of the drawings (a) to (d) show:

$$\begin{array}{llll} \text{(i)} & 2 \times \frac{1}{5} & \text{(ii)} & 2 \times \frac{1}{2} \\ \text{(iii)} & 3 \times \frac{2}{3} & \text{(iv)} & 3 \times \frac{1}{4} \end{array}$$


(a)



(b)



(c)

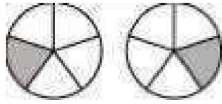


represents addition of 2 figures, each representing 1 shaded equal parts. Hence,

$$2 \times \frac{1}{5}$$

part out of 5

(d)



represents addition of 2 figures, each representing 1 shaded equal parts. Hence,

$$2 \times \frac{1}{2}$$

part out of 2

Answer :

$$2 \times \frac{1}{5}$$

(i)
is represented by
(d).

$$2 \times \frac{1}{2}$$

(ii)
is represented by
(b).

$$3 \times \frac{2}{3}$$

by (a).

$$3 \times \frac{1}{4}$$

(iii)
is represented

represents addition of 3 figures, each representing 2 shaded equal parts. Hence,

$$3 \times \frac{1}{4}$$

parts out of 3

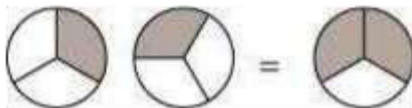
(iv) represents addition of 3 figures, each representing 1 shaded part out of 4 equal parts. Hence, is represented by (c).

Q2 :

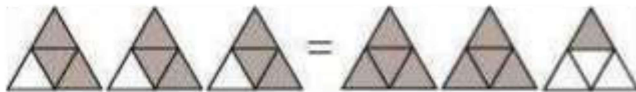
Some pictures (a) to (c) are given below. Tell which of them show:

(i) $3 \times \frac{1}{5} = \frac{3}{5}$ (ii) $2 \times \frac{1}{3} = \frac{2}{3}$ (iii) $3 \times \frac{3}{4} = 2 \frac{1}{4}$


(a)



(b)



(c)



Answer :

(i) $3 \times \frac{1}{5}$ represents the addition of 3 figures, each representing 1 shaded part out of 5 equal parts and $\frac{3}{5}$ represents 3 shaded

parts out of 5 equal parts. Hence, $3 \times \frac{1}{5} = \frac{3}{5}$ is represented by (c).

(ii) $2 \times \frac{1}{3}$ represents the addition of 2 figures, each representing 1 shaded part out of 3 equal parts and represents 2 shaded

parts out of 3 equal parts. Hence, $2 \times \frac{1}{3} = \frac{2}{3}$ is represented by (a).

(iii) $3 \times \frac{3}{4}$ represents the addition of 3 figures, each representing 3 shaded parts out of 4 equal parts and represents 2 fully

shaded figures and one figure having 1 part as shaded out of 4 equal parts. Hence, $3 \times \frac{3}{4} = 2\frac{1}{4}$ is represented by (b)

Q3 :

Multiply and reduce to lowest form and convert into a mixed fraction:

(i) $7 \times \frac{3}{5}$ (ii) $4 \times \frac{1}{3}$ (iii) $2 \times \frac{6}{7}$ (iv) $5 \times \frac{2}{9}$

(v) $\frac{2}{3} \times 4$ (vi) $\frac{5}{2} \times 6$ (vii) $11 \times \frac{4}{7}$ (viii) $20 \times \frac{4}{5}$

(ix) $13 \times \frac{1}{3}$ (x) $15 \times \frac{3}{5}$

Answer :

(i) $7 \times \frac{3}{5} = \frac{21}{5} = 4\frac{1}{5}$

(ii) $4 \times \frac{1}{3} = \frac{4}{3} = 1\frac{1}{3}$

(iii) $2 \times \frac{6}{7} = \frac{12}{7} = 1\frac{5}{7}$

(iv) $5 \times \frac{2}{9} = \frac{10}{9} = 1\frac{1}{9}$

(v) $\frac{2}{3} \times 4 = \frac{8}{3} = 2\frac{2}{3}$

(vi) $\frac{5}{2} \times 6 = 15$

$$(vii) \quad 11 \times \frac{4}{7} = \frac{44}{7} = 6\frac{2}{7}$$

$$(viii) \quad 20 \times \frac{4}{5} = 16$$

$$(ix) \quad 13 \times \frac{1}{3} = \frac{13}{3} = 4\frac{1}{3}$$

$$(x) \quad 15 \times \frac{3}{5} = 9$$


Q4 :
Shade:

$\frac{3}{5}$

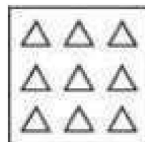
(i)

of the circles in box (a) (ii) $\frac{2}{3}$ of the triangles in box (b)


(iii) of the squares in box (c)



(a)




(b)




(c)

Answer :


- (i) It can be observed that there are 12 circles in the given box. We have to shade $\frac{1}{2}$ of the circles in it. As $12 \times \frac{1}{2} = 6$, therefore, we will shade any 6 circles of it.



- (ii) It can be observed that there are 9 triangles in the given box. We have to shade $\frac{2}{3}$ of the triangles in it. As $9 \times \frac{2}{3} = 6$, therefore, we will shade any 6 triangles of it.



(iii) It can be observed that there are 15 squares in the given box. We have to shade $\frac{3}{5}$ of the squares in it. As $\frac{3}{5} \times 15 = 9$, therefore, we will shade any 9 squares of it.



Q5 :

of (i) 24 (ii) 46

of (i) 18 (ii) 27

of (i) 16 (ii) 36

of (i) 20 (ii) 35

Find:

$$\frac{1}{2} \quad (\text{a})$$

$$\frac{2}{3} \quad (\text{b})$$

$$\frac{3}{4} \quad (\text{c})$$

$$\frac{4}{5} \quad (\text{d})$$

Answer :

$$\frac{1}{2} \times 24 = 12$$

(a) (i)

$$\frac{1}{2} \times 46 = 23$$

(ii)

$$\frac{2}{3} \times 18 = 12$$

(b) (i)

$$\frac{2}{3} \times 27 = 18$$

(ii)

$$\frac{3}{4} \times 16 = 12$$

(c) (i)

$$\frac{3}{4} \times 36 = 27$$

(ii)

$$\frac{4}{5} \times 20 = 16$$

(d) (i)

$$\frac{4}{5} \times 35 = 28$$

(ii)

Q6 :

Multiply and express as a mixed fraction:

(a) $3 \times 5\frac{1}{5}$ (b) $5 \times 6\frac{3}{4}$

(c) $7 \times 2\frac{1}{4}$ (d) $4 \times 6\frac{1}{3}$

(e) $3\frac{1}{4} \times 6$ (f) $3\frac{2}{5} \times 8$

Answer :

(a) $3 \times 5\frac{1}{5} = 3 \times \frac{26}{5} = \frac{78}{5} = 15\frac{3}{5}$

(b) $5 \times 6\frac{3}{4} = 5 \times \frac{27}{4} = \frac{135}{4} = 33\frac{3}{4}$

(c) $7 \times 2\frac{1}{4} = 7 \times \frac{9}{4} = \frac{63}{4} = 15\frac{3}{4}$

(d) $4 \times 6\frac{1}{3} = 4 \times \frac{19}{3} = \frac{76}{3} = 25\frac{1}{3}$

(e) $3\frac{1}{4} \times 6 = \frac{13}{4} \times 6 = \frac{78}{4} = \frac{39}{2} = 19\frac{1}{2}$

(f) $3\frac{2}{5} \times 8 = \frac{17}{5} \times 8 = \frac{136}{5} = 27\frac{1}{5}$

Q7 :

Find (a) $\frac{1}{2}$ of (i) $2\frac{3}{4}$ (ii) $4\frac{2}{9}$ (b) $\frac{5}{8}$ of (i) $3\frac{5}{6}$ (ii) $9\frac{2}{3}$

Answer :

(a) (i) $\frac{1}{2} \times 2\frac{3}{4} = \frac{1}{2} \times \frac{11}{4} = \frac{11}{8} = 1\frac{3}{8}$

(ii) $\frac{1}{2} \times 4\frac{2}{9} = \frac{1}{2} \times \frac{38}{9} = \frac{19}{9} = 2\frac{1}{9}$

(b) (i) $\frac{5}{8} \times 3\frac{5}{6} = \frac{5}{8} \times \frac{23}{6} = \frac{115}{48} = 2\frac{19}{48}$

(ii) $\frac{5}{8} \times 9\frac{2}{3} = \frac{5}{8} \times \frac{29}{3} = \frac{145}{24} = 6\frac{1}{24}$

Q8 :

Vidya and Pratap went for a picnic. Their mother gave them a water bottle that contained 5 litres of water. Vidya

consumed $\frac{2}{5}$ of the water, Pratap consumed the remaining water.

(i) How much water did Vidya drink?

(ii) What fraction of the total quantity of water did Pratap drink?

Answer :

(i) Water consumed by Vidya = $\frac{2}{5}$ of 5 litres

$$= \frac{2}{5} \times 5 = 2 \text{ litres}$$

(ii) Water consumed by Pratap = $1 - \frac{2}{5} = \frac{3}{5}$ of the total water

Exercise 2.3 : Solutions of Questions on Page Number : 41

Q1 :

Find:

(i) $\frac{1}{4}$ of (a) $\frac{1}{4}$ (b) $\frac{3}{5}$ (c) $\frac{4}{3}$

(ii) $\frac{1}{7}$ of (a) $\frac{2}{9}$ (b) $\frac{6}{5}$ (c) $\frac{3}{10}$

Answer :

(i) (a) $\frac{1}{4} \times \frac{1}{4} = \frac{1}{16}$

(b) $\frac{1}{4} \times \frac{3}{5} = \frac{3}{20}$

(c) $\frac{1}{4} \times \frac{4}{3} = \frac{1}{3}$

(ii) (a) $\frac{1}{7} \times \frac{2}{9} = \frac{2}{63}$

(b) $\frac{1}{7} \times \frac{6}{5} = \frac{6}{35}$

(c) $\frac{1}{7} \times \frac{3}{10} = \frac{3}{70}$

Q2 :

Multiply and reduce to lowest form (if possible):

(i) $\frac{2}{3} \times 2\frac{2}{3}$ (ii) $\frac{2}{7} \times \frac{7}{9}$ (iii) $\frac{3}{8} \times \frac{6}{4}$

(iv) $\frac{9}{5} \times \frac{3}{5}$ (v) $\frac{1}{3} \times \frac{15}{8}$ (vi) $\frac{11}{2} \times \frac{3}{10}$

(vii) $\frac{4}{5} \times \frac{12}{7}$

Answer :

(i) $\frac{2}{3} \times 2\frac{2}{3} = \frac{2}{3} \times \frac{8}{3} = \frac{16}{9} = 1\frac{7}{9}$

(ii) $\frac{2}{7} \times \frac{7}{9} = \frac{2}{9}$

(iii) $\frac{3}{8} \times \frac{6}{4} = \frac{9}{16}$

(iv) $\frac{9}{5} \times \frac{3}{5} = \frac{27}{25} = 1\frac{2}{25}$

(v) $\frac{1}{3} \times \frac{15}{8} = \frac{5}{8}$

(vi) $\frac{11}{2} \times \frac{3}{10} = \frac{33}{20} = 1\frac{13}{20}$

(vii) $\frac{4}{5} \times \frac{12}{7} = \frac{48}{35} = 1\frac{13}{35}$

Q3 :

Multiply the following fractions:

(i) $\frac{2}{5} \times 5\frac{1}{4}$ (ii) $6\frac{2}{5} \times \frac{7}{9}$ (iii) $\frac{3}{2} \times 5\frac{1}{3}$

$$(iv) \frac{5}{6} \times 2\frac{3}{7} \quad (v) 3\frac{2}{5} \times \frac{4}{7} \quad (vi) 2\frac{3}{5} \times 3$$

$$(vii) 3\frac{4}{7} \times \frac{3}{5}$$

Answer :

$$(i) \frac{2}{5} \times 5\frac{1}{4} = \frac{2}{5} \times \frac{21}{4} = \frac{21}{10}$$

This is an improper fraction and it can be written as a mixed fraction as $2\frac{1}{10}$.

$$(ii) 6\frac{2}{5} \times \frac{7}{9} = \frac{32}{5} \times \frac{7}{9} = \frac{224}{45}$$

This is an improper fraction and it can be written as a mixed fraction as $4\frac{44}{45}$.

$$(iii) \frac{3}{2} \times 5\frac{1}{3} = \frac{3}{2} \times \frac{16}{3} = 8$$

This is a whole number.

$$(iv) \frac{5}{6} \times 2\frac{3}{7} = \frac{5}{6} \times \frac{17}{7} = \frac{85}{42}$$

This is an improper fraction and it can be written as a mixed fraction as $2\frac{1}{42}$.

$$(v) 3\frac{2}{5} \times \frac{4}{7} = \frac{17}{5} \times \frac{4}{7} = \frac{68}{35}$$

This is an improper fraction and it can be written as a mixed fraction as $1\frac{33}{35}$.

$$(vi) 2\frac{3}{5} \times 3 = \frac{13}{5} \times 3 = \frac{39}{5}$$

This is an improper fraction and it can be written as a mixed fraction as $7\frac{4}{5}$.

$$(vii) 3\frac{4}{7} \times \frac{3}{5} = \frac{25}{7} \times \frac{3}{5} = \frac{15}{7}$$

This is an improper fraction and it can be written as a mixed fraction as $2\frac{1}{7}$.

Q4 :

Which is greater:

(i) $\frac{2}{7}$ of $\frac{3}{4}$ or $\frac{3}{5}$ of $\frac{5}{8}$

(ii) $\frac{1}{2}$ of $\frac{6}{7}$ or $\frac{2}{3}$ of $\frac{3}{7}$

Answer :

(i) $\frac{2}{7} \times \frac{3}{4} = \frac{3}{14}$

$\frac{3}{5} \times \frac{5}{8} = \frac{3}{8}$

Converting these fractions into like fractions,

$$\frac{3}{14} = \frac{3 \times 4}{14 \times 4} = \frac{12}{56}$$

$$\frac{3}{8} = \frac{3 \times 7}{8 \times 7} = \frac{21}{56}$$

Since $\frac{21}{56} > \frac{12}{56}$,

$$\therefore \frac{3}{8} > \frac{3}{14}$$

Therefore, $\frac{3}{5}$ of $\frac{5}{8}$ is greater.

(ii) $\frac{1}{2} \times \frac{6}{7} = \frac{3}{7}$

$$\frac{2}{3} \times \frac{3}{7} = \frac{2}{7}$$

Since $3 > 2$,

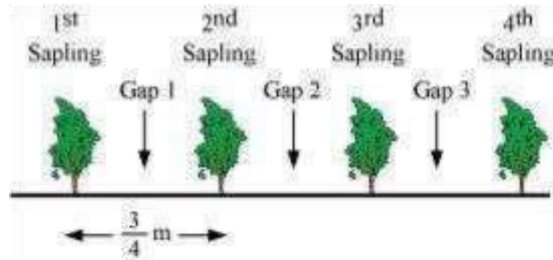
$$\therefore \frac{3}{7} > \frac{2}{7}$$

Therefore, $\frac{1}{2}$ of $\frac{6}{7}$ is greater.

Q5 :

Saili plants 4 saplings, in a row, in her garden. The distance between two adjacent saplings is $\frac{3}{4}$ m. Find the distance between the first and the last sapling.

Answer :



From the figure, it can be observed that gaps between 1st and last sapling = 3

Length of 1 gap = $\frac{3}{4}$ m

Therefore, distance between I and IV sapling = $3 \times \frac{3}{4} = \frac{9}{4} = 2\frac{1}{4}$ m

Q6 :

Lipika reads a book for $1\frac{3}{4}$ hours everyday. She reads the entire book in 6 days. How many hours in all were required by her to read the book?

Answer :

Number of hours Lipika reads the book per day = $1\frac{3}{4} = \frac{7}{4}$ hours

Number of days = 6

Total number of hours required by her to read the book = $\frac{7}{4} \times 6$

$= \frac{21}{2} = 10\frac{1}{2}$ hours

Q7 :

A car runs 16 km using 1 litre of petrol. How much distance will it cover using $2\frac{3}{4}$ litres of petrol.

Answer :

Number of kms a car can run per litre petrol = 16 km

Quantity of petrol = $\frac{11}{4}$ litre petrol = $\frac{11}{4} \times 16$ for = 44 km

$2\frac{3}{4} \text{ L} = \frac{11}{4} \text{ L}$

It will cover 44 km distance by $2\frac{3}{4}$ litres of petrol. using

Q8 :

(a) (i) Provide the number in the box , such

$$\frac{2}{3} \times \boxed{} = \frac{10}{30}$$

that .

(ii) The simplest form of the number obtained in

is _____.

$$\frac{3}{5} \times \boxed{} = \frac{24}{75}$$

(b) (i) Provide the number in the box , such

is _____.

that ?

(ii) The simplest form of the number obtained in

Answer :

(a) (i) As $\frac{2}{3} \times \frac{5}{10} = \frac{10}{30}$,

$$\frac{2}{3} \times \boxed{} = \frac{10}{30} \quad \text{is}$$

Therefore, the number in the box , such

that

$$\frac{5}{10}$$

(ii) The simplest form of $\frac{5}{10}$ is $\frac{1}{2}$.

(b) (i) As $\frac{3}{5} \times \frac{8}{15} = \frac{24}{75}$,

$$\frac{3}{5} \times \boxed{} = \frac{24}{75}$$

Therefore, the number in the box , such that

is

$$\frac{8}{15}$$

(ii) As $\frac{8}{15}$ cannot be further simplified, therefore, its simplest form is $\frac{8}{15}$.

or Previous Chapter : Chapter 1 : Fractions Chapter 2 : Decimals Chapter 3 : Integers Chapter 4 : Whole Numbers Chapter 5 : Fractions Chapter 6 : Decimals Chapter 7 : Integers Chapter 8 : Whole Numbers Chapter 9 : Fractions Chapter 10 : Decimals Chapter 11 : Integers Chapter 12 : Whole Numbers Chapter 13 : Fractions Chapter 14 : Decimals Chapter 15 : Integers Chapter 16 : Whole Numbers Chapter 17 : Fractions Chapter 18 : Decimals Chapter 19 : Integers Chapter 20 : Whole Numbers Chapter 21 : Fractions Chapter 22 : Decimals Chapter 23 : Integers Chapter 24 : Whole Numbers Chapter 25 : Fractions Chapter 26 : Decimals Chapter 27 : Integers Chapter 28 : Whole Numbers Chapter 29 : Fractions Chapter 30 : Decimals Chapter 31 : Integers Chapter 32 : Whole Numbers Chapter 33 : Fractions Chapter 34 : Decimals Chapter 35 : Integers Chapter 36 : Whole Numbers Chapter 37 : Fractions Chapter 38 : Decimals Chapter 39 : Integers Chapter 40 : Whole Numbers Chapter 41 : Fractions Chapter 42 : Decimals Chapter 43 : Integers Chapter 44 : Whole Numbers Chapter 45 : Fractions Chapter 46 : Decimals Chapter 47 : Integers Chapter 48 : Whole Numbers Chapter 49 : Fractions Chapter 50 : Decimals Chapter 51 : Integers Chapter 52 : Whole Numbers Chapter 53 : Fractions Chapter 54 : Decimals Chapter 55 : Integers Chapter 56 : Whole Numbers Chapter 57 : Fractions Chapter 58 : Decimals Chapter 59 : Integers Chapter 60 : Whole Numbers Chapter 61 : Fractions Chapter 62 : Decimals Chapter 63 : Integers Chapter 64 : Whole Numbers Chapter 65 : Fractions Chapter 66 : Decimals Chapter 67 : Integers Chapter 68 : Whole Numbers Chapter 69 : Fractions Chapter 70 : Decimals Chapter 71 : Integers Chapter 72 : Whole Numbers Chapter 73 : Fractions Chapter 74 : Decimals Chapter 75 : Integers Chapter 76 : Whole Numbers Chapter 77 : Fractions Chapter 78 : Decimals Chapter 79 : Integers Chapter 80 : Whole Numbers Chapter 81 : Fractions Chapter 82 : Decimals Chapter 83 : Integers Chapter 84 : Whole Numbers Chapter 85 : Fractions Chapter 86 : Decimals Chapter 87 : Integers Chapter 88 : Whole Numbers Chapter 89 : Fractions Chapter 90 : Decimals Chapter 91 : Integers Chapter 92 : Whole Numbers Chapter 93 : Fractions Chapter 94 : Decimals Chapter 95 : Integers Chapter 96 : Whole Numbers Chapter 97 : Fractions Chapter 98 : Decimals Chapter 99 : Integers Chapter 100 : Whole Numbers

Exercise 2.4 : Solutions of Questions on Page Number : 46

Q1 : Find:

(i) $12 \div \frac{3}{4}$ (ii) $14 \div \frac{5}{6}$ (iii) $8 \div \frac{7}{3}$

(iv) $4 \div \frac{8}{3}$ (v) $3 \div 2\frac{1}{3}$ (vi) $5 \div 3\frac{4}{7}$

Answer :

(i) $12 \div \frac{3}{4} = 12 \times \frac{4}{3} = 16$

(ii) $14 \div \frac{5}{6} = 14 \times \frac{6}{5} = \frac{84}{5}$

(iii) $8 \div \frac{7}{3} = 8 \times \frac{3}{7} = \frac{24}{7}$

(iv) $4 \div \frac{8}{3} = 4 \times \frac{3}{8} = \frac{3}{2}$

(v) $3 \div 2\frac{1}{3} = 3 \div \frac{7}{3} = 3 \times \frac{3}{7} = \frac{9}{7}$

(vi) $5 \div 3\frac{4}{7} = 5 \div \frac{25}{7} = 5 \times \frac{7}{25} = \frac{7}{5}$

Q2 :

Find the reciprocal of each of the following fractions. Classify the reciprocals as proper fractions, improper fractions and whole numbers.

(i) $\frac{3}{7}$ (ii) $\frac{5}{8}$ (iii) $\frac{9}{7}$

(iv) $\frac{6}{5}$ (v) $\frac{12}{7}$ (vi) $\frac{1}{8}$

(vii) $\frac{1}{11}$

Answer :

A proper fraction is the fraction which has its denominator greater than its numerator while improper fraction is the fraction which has its numerator greater than its denominator. Whole numbers are a collection of all positive integers including 0.

(i) $\frac{3}{7}$

Reciprocal = $\frac{7}{3}$

(ii) $\frac{5}{8}$

Reciprocal = $\frac{8}{5}$

Therefore, it is an improper fraction.

Therefore, it is an improper fraction.

(
iii) $\frac{9}{7}$

Reciprocal = $\frac{7}{9}$

Therefore, it is a proper fraction.

(iv) $\frac{6}{5}$

Reciprocal = $\frac{5}{6}$

Therefore, it is a proper fraction.

(v) $\frac{12}{7}$

Reciprocal = $\frac{7}{12}$

Therefore, it is a proper fraction.

(vi) $\frac{1}{8}$

Reciprocal = $\frac{8}{1}$

(vii) $\frac{1}{11}$

Therefore, it is a whole number. Reciprocal = $\frac{11}{1}$

Therefore, it is a whole number.

Q3 : Find:

(i) $\frac{7}{3} \div 2$ (ii) $\frac{4}{9} \div 5$ (iii) $\frac{6}{13} \div 7$

(iv) $4\frac{1}{3} \div 3$ (v) $3\frac{1}{2} \div 4$ (vi) $4\frac{3}{7} \div 7$

Answer :

$$(i) \quad \frac{7}{3} \div 2 = \frac{7}{3} \times \frac{1}{2} = \frac{7}{6}$$

$$(ii) \quad \frac{4}{9} \div 5 = \frac{4}{9} \times \frac{1}{5} = \frac{4}{45}$$

$$(iii) \quad \frac{6}{13} \div 7 = \frac{6}{13} \times \frac{1}{7} = \frac{6}{91}$$

$$(iv) \quad 4\frac{1}{3} \div 3 = \frac{13}{3} \div 3 = \frac{13}{3} \times \frac{1}{3} = \frac{13}{9}$$

$$(v) \quad 3\frac{1}{2} \div 4 = \frac{7}{2} \div 4 = \frac{7}{2} \times \frac{1}{4} = \frac{7}{8}$$

$$(vi) \quad 4\frac{3}{7} \div 7 = \frac{31}{7} \times \frac{1}{7} = \frac{31}{49}$$

Q4 :

Find:

$$(i) \quad \frac{2}{5} \div \frac{1}{2} \quad (ii) \quad \frac{4}{9} \div \frac{2}{3} \quad (iii) \quad \frac{3}{7} \div \frac{8}{7}$$

$$(iv) \quad 2\frac{1}{3} \div \frac{3}{5} \quad (v) \quad 3\frac{1}{2} \div \frac{8}{3} \quad (vi) \quad \frac{2}{5} \div 1\frac{1}{2}$$

$$(vii) \quad 3\frac{1}{5} \div 1\frac{2}{3} \quad (viii) \quad 2\frac{1}{5} \div 1\frac{1}{5}$$

Answer :

$$(i) \quad \frac{2}{5} \div \frac{1}{2} = \frac{2}{5} \times 2 = \frac{4}{5}$$

$$(ii) \quad \frac{4}{9} \div \frac{2}{3} = \frac{4}{9} \times \frac{3}{2} = \frac{2}{3}$$

$$(iii) \quad \frac{3}{7} \div \frac{8}{7} = \frac{3}{7} \times \frac{7}{8} = \frac{3}{8}$$

(

$$\text{iv) } 2\frac{1}{3} \div \frac{3}{5} = \frac{7}{3} \div \frac{3}{5} = \frac{7}{3} \times \frac{5}{3} = \frac{35}{9}$$

$$\text{(v) } 3\frac{1}{2} \div \frac{8}{3} = \frac{7}{2} \div \frac{8}{3} = \frac{7}{2} \times \frac{3}{8} = \frac{21}{16}$$

$$\text{(vi) } \frac{2}{5} \div 1\frac{1}{2} = \frac{2}{5} \div \frac{3}{2} = \frac{2}{5} \times \frac{2}{3} = \frac{4}{15}$$

$$\text{(vii) } 3\frac{1}{5} \div 1\frac{2}{3} = \frac{16}{5} \div \frac{5}{3} = \frac{16}{5} \times \frac{3}{5} = \frac{48}{25}$$

$$\text{(viii) } 2\frac{1}{5} \div 1\frac{1}{5} = \frac{11}{5} \div \frac{6}{5} = \frac{11}{5} \times \frac{5}{6} = \frac{11}{6}$$

Exercise 2.5 : Solutions of Questions on Page Number : 47

Q1 :

Which is greater?

(i) 0.5 or 0.05 (ii) 0.7 or 0.5 (iii) 7 or 0.7

(iv) 1.37 or 1.49 (v) 2.03 or 2.30 (vi) 0.8 or 0.88

Answer :

(i) 0.5 or 0.05

Converting these decimal numbers into equivalent fractions,

$$0.5 = \frac{5}{10} = \frac{5 \times 10}{10 \times 10} = \frac{50}{100} \text{ and } 0.05 = \frac{5}{100}$$

It can be observed that both fractions have the same denominator.

As $50 > 5$,

Therefore, $0.5 > 0.05$

(ii) 0.7 or 0.5

Converting these decimal numbers into equivalent fractions,

$$0.7 = \frac{7}{10} \text{ and } 0.5 = \frac{5}{10}$$

It can be observed that both fractions have the same denominator.

As $7 > 5$,

Therefore, $0.7 > 0.5$

(iii) 7 or 0.7

Converting these decimal numbers into equivalent fractions,

$$7 = \frac{7}{1} = \frac{7 \times 10}{1 \times 10} = \frac{70}{10} \text{ and } 0.7 = \frac{7}{10}$$

It can be observed that both fractions have the same denominator.
 As $70 > 7$,
 Therefore, $7 > 0.7$

(iv) 1.37 or 1.49

Converting these decimal numbers into equivalent fractions,

$$1.37 = \frac{137}{100} \text{ and } 1.49 = \frac{149}{100}$$

It can be observed that both fractions have the same denominator.

As $137 < 149$,

Therefore, $1.37 < 1.49$

(v) 2.03 or 2.30

Converting these decimal numbers into equivalent fractions,

$$2.03 = \frac{203}{100} \text{ and } 2.30 = \frac{230}{100}$$

It can be observed that both fractions have the same denominator.

As $203 < 230$,

Therefore, $2.03 < 2.30$

(vi) 0.8 or 0.88

Converting these decimal numbers into equivalent fractions,

$$0.8 = \frac{8}{10} = \frac{8 \times 10}{10 \times 10} = \frac{80}{100} \text{ and } 0.88 = \frac{88}{100}$$

It can be observed that both fractions have the same denominator.

As $80 < 88$, Therefore,
 $0.8 < 0.88$

Q2 :

Express as rupees using decimals:

(i) 7 paise (ii) 7 rupees 7 paise (iii) 77 rupees 77 paise

(iv) 50 paise (v) 235 paise

Answer :

There are 100 paise in 1 rupee. Therefore, if we want to convert paise into rupees, then we have to divide paise by 100.

(i) 7 paise = $\text{Rs } \frac{7}{100} = \text{Rs } 0.07$

(ii) 7 Rs 7 paise = $\text{Rs } 7 + \text{Rs } \frac{7}{100}$
 = Rs 7.07

(iii) 77 Rs 77 paise = $\text{Rs } 77 + \text{Rs } \frac{77}{100} = \text{Rs } 77.77$

(

$$\text{iv) } 50 \text{ paise} = \text{Rs } \frac{50}{100} = \text{Rs } 0.50$$

$$\text{(v) } 235 \text{ paise} = \frac{235}{100} \text{ rupees} = \text{Rs } 2.35$$

Q3 :

(i) Express 5 cm in metre and kilometre

(ii) Express 35 mm in cm, m and km

Answer :

(i) 5 cm

$$5 \text{ cm} = \frac{5}{100} \text{ m} = 0.05 \text{ m}$$
$$5 \text{ cm} = \frac{5}{100000} \text{ km} = 0.00005 \text{ km}$$

(ii) 35 mm

$$35 \text{ mm} = \frac{35}{10} \text{ cm} = 3.5 \text{ cm}$$
$$35 \text{ mm} = \frac{35}{1000} \text{ m} = 0.035 \text{ m}$$
$$35 \text{ mm} = \frac{35}{1000000} \text{ km} = 0.000035 \text{ km}$$

Q4 :

Express in kg:

(i) 200 g (ii) 3470 g (iii) 4 kg 8 g

Answer :

$$\text{(i) } 200 \text{ g} = \frac{200}{1000} \text{ kg} = 0.2 \text{ kg}$$

$$\text{(ii) } 3470 \text{ g} = \frac{3470}{1000} \text{ kg} = 3.470 \text{ kg}$$

$$\text{(iii) } 4 \text{ kg } 8 \text{ g} = 4 \text{ kg} + \frac{8}{1000} \text{ kg} = 4.008 \text{ kg}$$

Q5 :

Write the following decimal numbers in the expanded form: (i) 20.03 (ii) 2.03 (iii) 200.03

(iv) 2.034

Answer :

(i) 20.03
$$= 2 \times 10 + 0 \times 1 + 0 \times \frac{1}{10} + 3 \times \frac{1}{100}$$

(ii) 2.03
$$= 2 \times 1 + 0 \times \frac{1}{10} + 3 \times \frac{1}{100}$$

(iii) 200.03
$$= 2 \times 100 + 0 \times 10 + 0 \times 1 + 0 \times \frac{1}{10} + 3 \times \frac{1}{100}$$

(iv) 2.034
$$= 2 \times 1 + 0 \times \frac{1}{10} + 3 \times \frac{1}{100} + 4 \times \frac{1}{1000}$$

Q6 :

Write the place value of 2 in the following decimal numbers:

(i) 2.56 (ii) 21.37 (iii) 10.25

(iv) 9.42 (v) 63.352

Answer :

(i) 2.56

Ones

(ii) 21.37

Tens

(iii) 10.25

Tenths

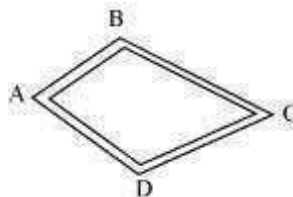
(iv) 9.42

Hundredths

(v) 63.352 Thousandths

Q7 :

Dinesh went from place A to place B and from there to place C. A is 7.5 km from B and B is 12.7 km from C. Ayub went from place A to place D and from there to place C. D is 9.3 km from A and C is 11.8 km from D. Who travelled more and by how much?



Answer :

(
Distance travelled by Dinesh = $AB + BC = (7.5 + 12.7)$ km

$$\begin{array}{r} 7.5 \\ +12.7 \\ \hline 20.2 \end{array}$$

Therefore, Dinesh travelled 20.2 km.

Distance travelled by Ayub = AD + DC = (9.3 + 11.8) km

$$\begin{array}{r} 9.3 \\ +11.8 \\ \hline 21.1 \end{array}$$

Therefore, Ayub travelled 21.1 km.

Hence, Ayub travelled more distance.

Difference = (21.1 - 20.2) km

$$\begin{array}{r} 21.1 \\ -20.2 \\ \hline 0.9 \end{array}$$

Therefore, Ayub travelled 0.9 km more than Dinesh.

Q8 :

Shyama bought 5 kg 300 g apples and 3 kg 250 g mangoes. Sarala bought 4 kg 800 g oranges and 4 kg 150 g bananas. Who bought more fruits?

Answer :

Total fruits bought by Shyama = 5 kg 300 g + 3 kg 250 g

= 8 kg 550 g

$$= \left(8 + \frac{550}{1000} \right) \text{ kg}$$

= 8.550 kg

Total fruits bought by Sarala = 4 kg 800 g + 4 kg 150 g

= 8 kg 950 g

$$= \left(8 + \frac{950}{1000} \right) \text{ kg}$$

= 8.950 kg

∴ Sarala bought more fruits.

Q9 :

How much less is 28 km than 42.6 km?

Answer :

$$\begin{array}{r} 42.6 \\ -28.0 \\ \hline 14.6 \end{array}$$

Therefore, 28 km is 14.6 km less than 42.6 km.

Exercise 2.6 : Solutions of Questions on Page Number : 52

Q1 :

Find:

(i) 0.2×6 (ii) 8×4.6 (iii) 2.71×5

(iv) 20.1×4 (v) 0.05×7 (vi) 211.02×4

(vii) 2×0.86

Answer :

(i) $0.2 \times 6 = \frac{2}{10} \times 6 = \frac{12}{10} = 1.2$

(ii) $8 \times 4.6 = 8 \times \frac{46}{10} = \frac{368}{10} = 36.8$

(iii) $2.71 \times 5 = \frac{271}{100} \times 5 = \frac{1355}{100} = 13.55$

(iv) $20.1 \times 4 = \frac{201}{10} \times 4 = \frac{804}{10} = 80.4$

(v) $0.05 \times 7 = \frac{5}{100} \times 7 = \frac{35}{100} = 0.35$

(vi) $211.02 \times 4 = \frac{21102}{100} \times 4 = \frac{84408}{100} = 844.08$

(vii) $2 \times 0.86 = 2 \times \frac{86}{100} = \frac{172}{100} = 1.72$

Q2 :

Find the area of rectangle whose length is 5.7 cm and breadth is 3 cm.

Answer :

Length = 5.7 cm

Breadth = 3 cm

Area = Length \times Breadth

$= 5.7 \times 3 = 17.1 \text{ cm}^2$

Q3 :

Find:

- (i) 1.3×10 (ii) 36.8×10 (iii) 153.7×10
(iv) 168.07×10 (v) 31.1×100 (vi) 156.1×100
(vii) 3.62×100 (viii) 43.07×100 (ix) 0.5×10
(x) 0.08×10 (xi) 0.9×100 (xii) 0.03×1000

Answer :

We know that when a decimal number is multiplied by 10, 100, 1000, the decimal point in the product is shifted to the right by as many places as there are zeroes. Therefore, these products can be calculated as

- (i) $1.3 \times 10 = 13$
(ii) $36.8 \times 10 = 368$
(iii) $153.7 \times 10 = 1537$
(vi) $168.07 \times 10 = 1680.7$
(v) $31.1 \times 100 = 3110$
(vi) $156.1 \times 100 = 15610$
(vii) $3.62 \times 100 = 362$
(viii) $43.07 \times 100 = 4307$
(ix) $0.5 \times 10 = 5$
(x) $0.08 \times 10 = 0.8$
(xi) $0.9 \times 100 = 90$ (xiii) $0.03 \times 1000 = 30$

Q4 :

A two-wheeler covers a distance of 55.3 km in one litre of petrol. How much distance will it cover in 10 litres of petrol?

Answer :

Distance covered in 1 litre of petrol = 55.3 km

Distance covered in 10litre of petrol = $10 \times 55.3 = 553$ km
Therefore, it will cover 553 km distance in 10 litre petrol.

Q5 : Find:

- (i) 2.5×0.3 (ii) 0.1×51.7 (iii) 0.2×316.8
(iv) 1.3×3.1 (v) 0.5×0.05 (vi) 11.2×0.15
(vii) 1.07×0.02 (viii) 10.05×1.05 (ix) 101.01×0.01
(x) 100.01×1.1

Answer :

$$(i) \quad 2.5 \times 0.3 = \frac{25}{10} \times \frac{3}{10} = \frac{75}{100} = 0.75$$

$$(ii) \quad 0.1 \times 51.7 = \frac{1}{10} \times \frac{517}{10} = \frac{517}{100} = 5.17$$

$$(iii) \quad 0.2 \times 316.8 = \frac{2}{10} \times \frac{3168}{10} = \frac{6336}{100} = 63.36$$

$$(iv) \quad 1.3 \times 3.1 = \frac{13}{10} \times \frac{31}{10} = \frac{403}{100} = 4.03$$

$$(v) \quad 0.5 \times 0.05 = \frac{5}{10} \times \frac{5}{100} = \frac{25}{1000} = 0.025$$

$$(vi) \quad 11.2 \times 0.15 = \frac{112}{10} \times \frac{15}{100} = \frac{1680}{1000} = 1.680 = 1.68$$

$$(vii) \quad 1.07 \times 0.02 = \frac{107}{100} \times \frac{2}{100} = \frac{214}{10000} = 0.0214$$

$$(viii) \quad 10.05 \times 1.05 = \frac{1005}{100} \times \frac{105}{100} = \frac{105525}{10000} = 10.5525$$

$$(ix) \quad 101.01 \times 0.01 = \frac{10101}{100} \times \frac{1}{100} = \frac{10101}{10000} = 1.0101$$

$$(x) \quad 100.01 \times 1.1 = \frac{10001}{100} \times \frac{11}{10} = \frac{110011}{1000} = 110.011$$

Exercise 2.7 : Solutions of Questions on Page Number : 55

Q1 : Find:

$$(i) \quad 0.4 \div 2 \quad (ii) \quad 0.35 \div 5 \quad (iii) \quad 2.48 \div 4$$

$$(iv) \quad 65.4 \div 6 \quad (v) \quad 651.2 \div 4 \quad (vi) \quad 14.49 \div 7$$

$$(vii) \quad 3.96 \div 4 \quad (viii) \quad 0.80 \div 5$$

Answer :

$$(i) \quad 0.4 \div 2 = \frac{4}{10} \div 2 = \frac{4}{10} \times \frac{1}{2} = \frac{2}{10} = 0.2$$

$$(ii) \quad 0.35 \div 5 = \frac{35}{100} \div 5 = \frac{35}{100} \times \frac{1}{5} = \frac{7}{100} = 0.07$$

$$(iii) \quad 2.48 \div 4 = \frac{248}{100} \div 4 = \frac{248}{100} \times \frac{1}{4} = \frac{62}{100} = 0.62$$

$$(iv) \quad 65.4 \div 6 = \frac{654}{10} \div 6 = \frac{654}{10} \times \frac{1}{6} = \frac{109}{10} = 10.9$$

$$(v) \quad 651.2 \div 4 = \frac{6512}{10} \div 4 = \frac{6512}{10} \times \frac{1}{4} = \frac{1628}{10} = 162.8$$

$$(vi) \quad 14.49 \div 7 = \frac{1449}{100} \div 7 = \frac{1449}{100} \times \frac{1}{7} = \frac{207}{100} = 2.07$$

$$(vii) \quad 3.96 \div 4 = \frac{396}{100} \div 4 = \frac{396}{100} \times \frac{1}{4} = \frac{99}{100} = 0.99$$

$$(viii) \quad 0.80 \div 5 = \frac{80}{100} \div 5 = \frac{80}{100} \times \frac{1}{5} = \frac{16}{100} = 0.16$$

Q2 :

Find:

(i) $4.8 \div 10$ (ii) $52.5 \div 10$ (iii) $0.7 \div 10$

(iv) $33.1 \div 10$ (v) $272.23 \div 10$ (vi) $0.56 \div 10$

(vii) $3.97 \div 10$

Answer :

We know that when a decimal number is divided by a multiple of 10 only (i.e., 10, 100, 1000, etc.), the decimal point will be shifted to the left by as many places as there are zeroes. Since here we are dividing by 10, the decimal will shift to the left by 1 place.

(i) $4.8 \div 10 = 0.48$

(ii) $52.5 \div 10 = 5.25$

(iii) $0.7 \div 10 = 0.07$

(iv) $33.1 \div 10 = 3.31$

(v) $272.23 \div 10 = 27.223$

(vi) $0.56 \div 10 = 0.056$ (vii) $3.97 \div 10 = 0.397$

Q3 : Find:

(i) $2.7 \div 100$ (ii) $0.3 \div 100$ (iii) $0.78 \div 100$ (iv) $432.6 \div 100$ (v) $23.6 \div 100$ (vi) $98.53 \div 100$

Answer :

We know that when a decimal number is divided by a multiple of 10 only (i.e., 10, 100, 1000, etc.), the decimal point will be shifted to the left by as many places as there are zeroes. Since here we are dividing by 100, the decimal will shift to the left by 2 places. (i) $2.7 \div 100 = 0.027$

(ii) $0.3 \div 100 = 0.003$

(iii) $0.78 \div 100 = 0.0078$

(iv) $432.6 \div 100 = 4.326$

(v) $23.6 \div 100 = 0.236$ (vi) $98.53 \div 100 = 0.9853$

Q4 :
Find:

(i) $7.9 \div 1000$ (ii) $26.3 \div 1000$ (iii) $38.53 \div 1000$

(iv) $128.9 \div 1000$ (v) $0.5 \div 1000$

Answer :

We know that when a decimal number is divided by a multiple of 10 only (i.e., 10, 100, 1000, etc.), the decimal point will be shifted to the left by as many places as there are zeroes. Since here we are dividing by 1000, the decimal will shift to the left by 3 places.

(i) $7.9 \div 1000 = 0.0079$

(ii) $26.3 \div 1000 = 0.0263$

(iii) $38.53 \div 1000 = 0.03853$

(iv) $128.9 \div 1000 = 0.1289$

(v) $0.5 \div 1000 = 0.0005$

Q5 : Find:

(i) $7 \div 3.5$ (ii) $36 \div 0.2$ (iii) $3.25 \div 0.5$

(iv) $30.94 \div 0.7$ (v) $0.5 \div 0.25$ (vi) $7.75 \div 0.25$

(vii) $76.5 \div 0.15$ (viii) $37.8 \div 1.4$ (ix) $2.73 \div 1.3$

Answer :

(i) $7 \div 3.5 = 7 \div \frac{35}{10} = 7 \times \frac{10}{35} = 2$

(ii) $36 \div 0.2 = 36 \div \frac{2}{10} = 36 \times \frac{10}{2} = 180$

(iii) $3.25 \div 0.5 = \frac{325}{100} \div \frac{5}{10} = \frac{325}{100} \times \frac{10}{5} = \frac{65}{10} = 6.5$

$$(iv) \quad 30.94 \div 0.7 = \frac{3094}{100} \div \frac{7}{10} = \frac{3094}{100} \times \frac{10}{7} = \frac{442}{10} = 44.2$$

$$(v) \quad 0.5 \div 0.25 = \frac{5}{10} \div \frac{25}{100} = \frac{5}{10} \times \frac{100}{25} = 2$$

$$(vi) \quad 7.75 \div 0.25 = \frac{775}{100} \div \frac{25}{100} = \frac{775}{100} \times \frac{100}{25} = 31$$

$$(vii) \quad 76.5 \div 0.15 = \frac{765}{10} \div \frac{15}{100} = \frac{765}{10} \times \frac{100}{15} = 510$$

$$(viii) \quad 37.8 \div 1.4 = \frac{378}{10} \div \frac{14}{10} = \frac{378}{10} \times \frac{10}{14} = 27$$

$$(ix) \quad 2.73 \div 1.3 = \frac{273}{100} \div \frac{13}{10} = \frac{273}{100} \times \frac{10}{13} = \frac{21}{10} = 2.1$$

Q6 :

A vehicle covers a distance of 43.2 km in 2.4 litres of petrol. How much distance will it cover in one litre of petrol?

Answer :

Distance covered in 2.4 litres of petrol = 43.2 km

$$\therefore \text{Distance covered in 1 litre of petrol} = \frac{43.2 \div 2.4 = \frac{432}{10} \div \frac{24}{10} = \frac{432}{10} \times \frac{10}{24} = 18$$

Therefore, the vehicle will cover 18 km in 1 litre petrol.